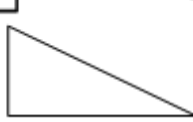

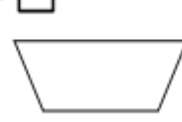
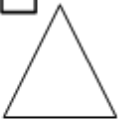
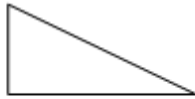



Dreiecke und Vierecke ankreuzen

Kreuze alle Vierecke an.

A ☐B ☐C ☐D ☐E ☐F ☐G ☐H ☐I ☐

Kreuze alle Dreiecke an.

A ☐B ☐C ☐D ☐E ☐F ☐G ☐H ☐I ☐

Welche Form hat die Figur I?
