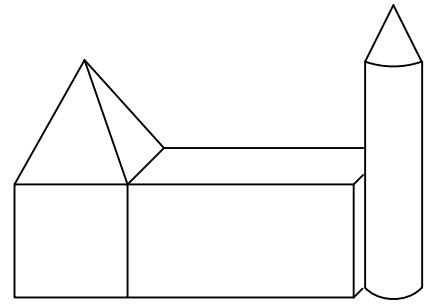


---

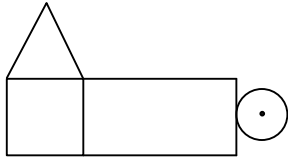
## Bauwerk von oben

---

Welche Zeichnung zeigt das Bauwerk von oben?




A ☐



B ☐



C ☐



D ☐

