


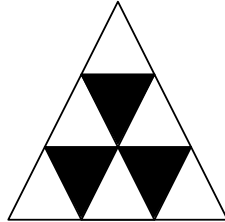
Gleichung finden 1

Lisa schreibt zu jeder Musterreihe eine Rechnung. Ergänze die fehlende Rechnung.

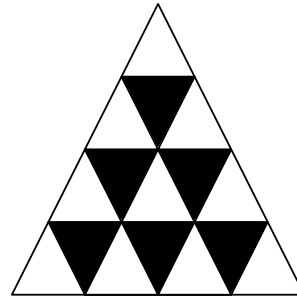
a)




$$1 + 3 = 4$$




$$3 + 6 = 9$$




b)



$$5 + 20 = 25$$





$$3 + 6 = 9$$



$$2 + 2 = 4$$