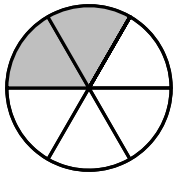
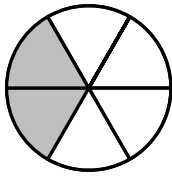
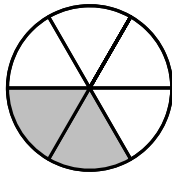

Fehlende Abbildung



1.

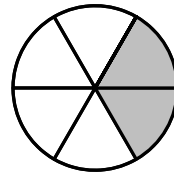


2.



3.

?



5.

Welche der folgenden Abbildungen gehört an die 4. Stelle?

